

AZAAN INTERNATIONAL SCHOOL

Grade - I

Activity Sheet- VII

Subject-MATHS

Name: _____ Class: ____ Sec: _____

CHAPTER NO: 7. SUBTRACTING GREATER NUMBERS

I. Fill in the blanks.

a. $26-2=$ _____.

b. $12-0=$ _____.

c. 8 tens and 5 ones _____.

d. One more than 75 is _____.

e. $61+9=70$,so $9+61=$ _____.

II. Choose the correct answer and write it in the brackets.

1. The number _____ is called the difference in $5-3=2$. ()

a. 5

b. 2

c. 3

2. There are seven red toy cars and four blue toy cars. ()

There are _____ more red cars than blue cars.

a. 3

b.5

c.1

3. $12 - 8 =$ _____. ()

a. 3

b. 4

c. 7

4. Sixteen has _____ more numbers than 14. ()

a. 5

b. 7

c. 2

5. Riya has 14 pens and Alvi has 7 pens. Who has more pens and how many more?

()

a. Riya has 2 more

b. Alvi has 7 more

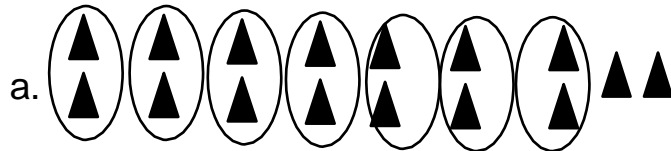
c. Riya has 7 more.

III. Subtract and Match.

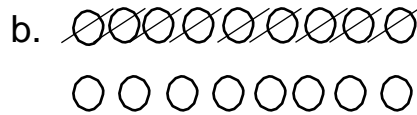
Column A

1. $17 - 9 = 8$

Column B



2. $12 - 6 = 6$



3. $16 - 14 = 2$



III. Solve by drawing lines.

A. There are 37 birds on a tree. 15 flew away. How many are left on the tree?

Sol:

$$\square - \square = \square$$

The number of birds left on the tree are _____ .

**B. Class 1A has 9 stars on its board. Class 1B has 5 stars on its board.
How many more stars does 1A have than class 1B?**

Sol:

$$\square - \square = \square$$

Class 1A has _____ more stars than class 1B.

AZAAN INTERNATIONAL SCHOOL

Grade - I

Activity Sheet- VIII

Subject-MATHS

Name: _____ Class: _____ Sec: _____



CHAPTER NO: 8. MEASUREMENT.

I. Fill in the blanks with the correct options.


- a. The eraser is _____ than pencil. [longer / shorter]
- b. The length of a duster is measured by _____. [Paperclips / ball]
- c. The hand span is used to measure _____. [Length / weight]
- d. The elephant has _____ trunk. [shorter/longer]
- e. The giraffe is _____ than the horse. [Taller / shorter]

II. Tick the objects which are shorter.

a.




b.



c.




III. How long is each object?



a. The pencil is _____ paper clips long.



b. The toothbrush is _____ erasers long.



c. The book is _____ erasers long.

IV. Use hand span to measure the length of the following objects .Write first estimated length and then write actual length measured.

Object	Estimate length	Exact length in hand span
1. window		
2. door		
3. table		


V. Fill in the blanks.



a. The apples are _____ than mangoes. (Heavier / lighter)

b. The mangoes are _____ than apples. (Heavier / lighter)

c. The banana weighs about _____ clay balls.



VI. Colour the picture that holds more water with red and less with blue.

